

8. b kategorija
8. b kategorija

grupa A



Drniš, 26. i 27. travnja 2025

Ime i prezime: _____

1. a) Izgradi i zapiši zadane intervale u tonskom sustavu u smjeru strelice: 15 bodova



v.10↑

p.4↓

m.3↑

v.9↓

s.5↑

gis


F

es1


fis3

F

b) Prepoznavaj i napiši vrstu i veličinu zadanih intervala: 10 bodova



2. a) Izgradi zadane akorde ako je: 15 bodova



M $\frac{6}{4}$

P $\frac{6}{3}$

S $\frac{6}{4}$

D $\frac{6}{3}$

M $\frac{6}{3}$

zadani ton seksta

zadani ton terca

zadani ton kvarta

zadani ton seksta

zadani ton terca

8. b kategorija

b) Prepoznavaj zadane akorde i označi ih šifrom:

12 bodova




3. a) Prepoznavaj, označi i zapiši vrstu zadanih septakorda:

10 bodova



b) Izgradi zadane septakorde naviše:

10 bodova



VM7

MD7


P7

S7


VD7

4. Izgradi kromatske ljestvice u smjeru strelice (predznake piši ispred tonova):

8 bodova




D dur↑




e mol↓

8. b kategorija





F dur↑



c mol↓

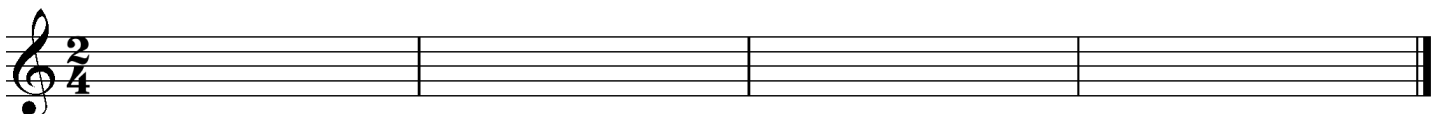
5. Transkribiraj zadani ritamski primjer u zadanu mjeru:

12 bodova



6. Transponiraj zadani melodijski primjer u zadani tonalitet:

8 bodova



A dur

____od ukupno 100 bodova

Članovi ocjenjivačkog suda:

1. _____

2. _____

3. _____